







Multiplication

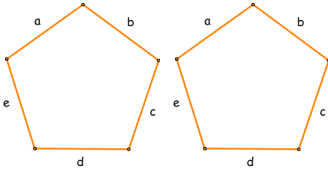
<p>A flower has 5 petals. How many petals have 3 flowers got? ____</p> <div style="text-align: center;">  </div> <p style="text-align: center;">____ x ____ = ____</p>	<p>A flower has 5 petals. How many petals has 5 flowers got? ____</p> <p style="text-align: center;">____ x ____ = ____</p>
<p>There are 7 days in one week. How many days are there in 2 weeks? ____</p> <div style="display: flex; justify-content: space-around;"> <div style="text-align: center;">  </div> <div style="text-align: center;">  </div> </div> <p style="text-align: center;">____ x ____ = ____</p>	<p>There are 7 days in one week. How many days are there in 3 weeks? ____</p> <p style="text-align: center;">____ x ____ = ____</p>
<p>There are 8 sweets in a packet. How many sweets will be in 2 packets? ____</p> <div style="text-align: center;">  </div> <p style="text-align: center;">_____</p>	<p>There are 8 sweets in a packet. How many sweets will be in 3 packets? ____</p> <p style="text-align: center;">_____</p>
<p>There are 4 packets of crayons and 10 in each pack. How many crayons altogether? ____</p> <div style="text-align: center;">  </div> <p style="text-align: center;">_____</p>	<p>There are 6 packets of crayons and 10 in each pack. How many crayons altogether? ____</p> <p style="text-align: center;">_____</p>

One boy has 2 legs.
How many legs will 6 boys have? _____



One boy has 2 legs.
How many legs will 8 boys have? _____

A pentagon has 5 sides.
How many will 2 pentagons have? _____



A pentagon has 5 sides.
How many will 10 pentagons have? _____

Which has **more**?

4 bags of sweets with 5 in each or **3 bags of sweets with 10 in each?**

Draw your reasoning and write multiplication calculations.